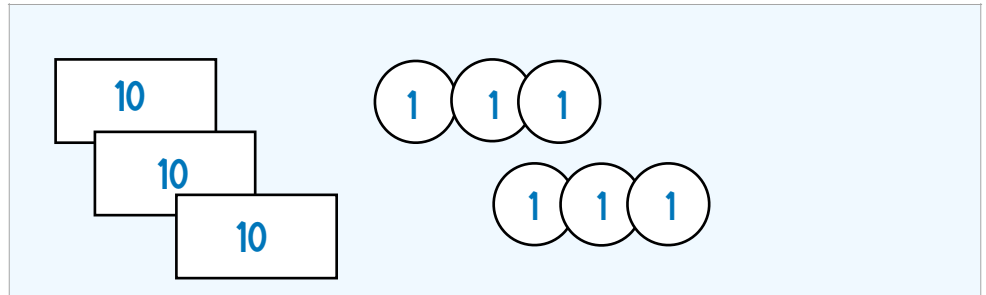
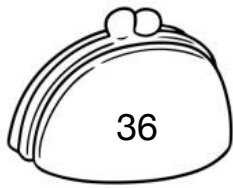


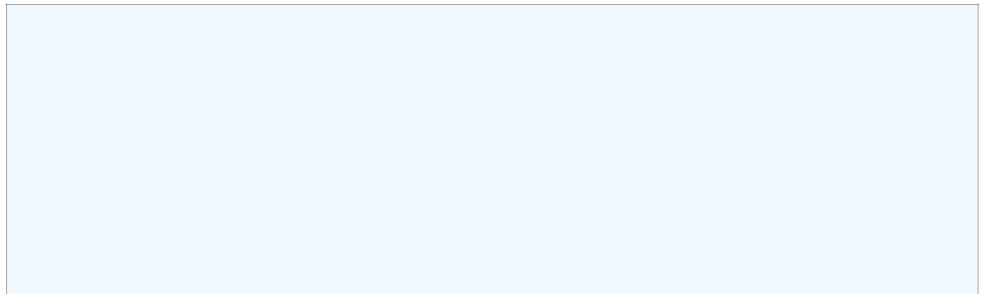
Oefenen met tientallen en eenheden

naam: _____





T	E
3	6

$$\underline{\quad 30 \quad} + \underline{\quad 6 \quad} = \underline{\quad 36 \quad}$$




T	E

$$\underline{\quad \dots \quad} + \underline{\quad \dots \quad} = \underline{\quad \dots \quad}$$



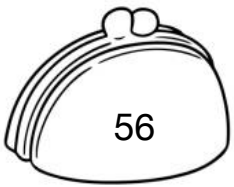
T	E

$$\underline{\quad \dots \quad} + \underline{\quad \dots \quad} = \underline{\quad \dots \quad}$$



T	E

$$\dots + \dots = \dots$$




T	E

$$\dots + \dots = \dots$$



T	E


$$\dots + \dots = \dots$$



Blank area for drawing or writing.

T	E

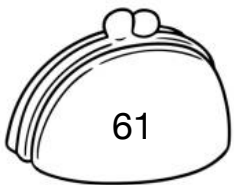
$$\dots + \dots = \dots$$



Blank area for drawing or writing.

T	E

$$\dots + \dots = \dots$$



Blank area for drawing or writing.

T	E

$$\dots + \dots = \dots$$